







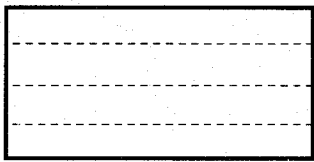


3

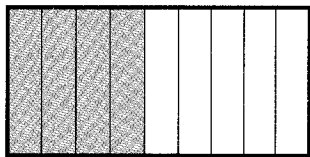
Rozděl geometrické tvary na čtvrtiny. Zkus najít více řešení, jak obrázek rozdělit.



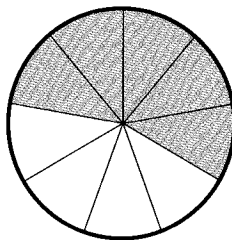
4

Berny popletl zlomky a potřebuje pomoc. Oprav znárornění, aby odpovídalo zlomku.

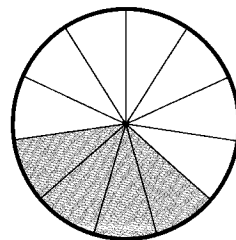
$$\frac{6}{9}$$



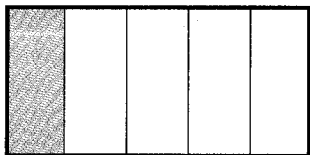
$$\frac{2}{3}$$



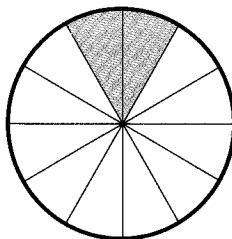
$$\frac{4}{11}$$



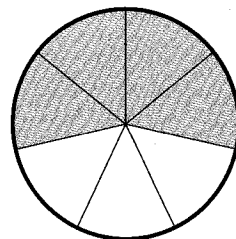
$$\frac{2}{5}$$



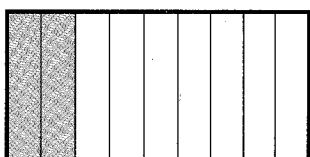
$$\frac{5}{12}$$



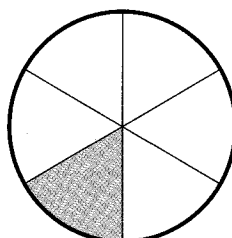
$$\frac{5}{7}$$



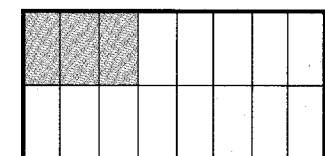
$$\frac{7}{9}$$



$$\frac{4}{6}$$



$$\frac{1}{2}$$



5

Berny potřebuje pomoc se slovní úlohou. Vypočítej ji.

Na stole je 24 jablek. Jakou část těchto jablek představuje a) 6 jablek , b) 4 jablka, c) 3 jablka.

a)

b)

c)
