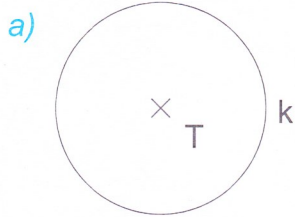
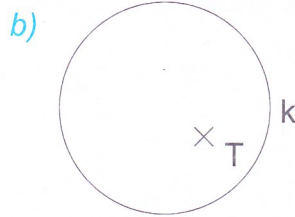


1 Podle zadání řešte úkoly.


A) Měly by všechny body, které bychom vyznačili na kružnici  $k$ , stejnou vzdálenost od bodu  $T$ ?



ano  ne






ano  ne

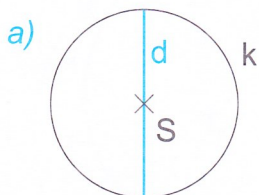


ano  ne

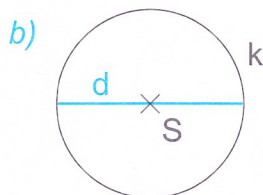
B) Napište, zda je na obrázku modrou barvou znázorněný kruh, nebo kružnice.



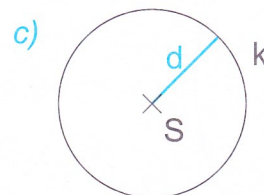
C) Rozhodněte, zda je na obrázku modrou barvou vyznačený průměr  $d$  kružnice  $k$  se středem  $S$ .



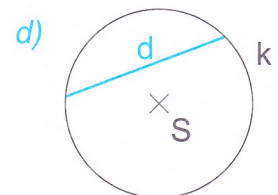
ano  ne



ano  ne

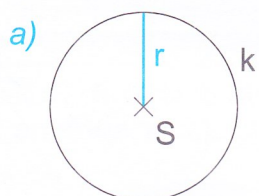


ano  ne

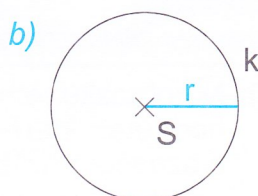


ano  ne

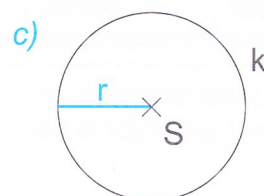
D) Rozhodněte, zda je na obrázku modrou barvou vyznačený poloměr  $r$  kružnice  $k$  se středem  $S$ .



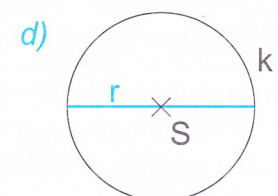
ano  ne



ano  ne



ano  ne



ano  ne

E) U kružnic  $k$  a  $m$  vyznačte a popište jejich poloměry. U kružnic  $l$  a  $n$  vyznačte a popište jejich průměry.

